

**Notations :**

- 1.Options shown in green color and with ✓ icon are correct.
- 2.Options shown in red color and with ✘ icon are incorrect.

**Question Number : 1 Question Id : 630680150391 Is Question Mandatory : No Calculator : None Response Time : N.A Think Time : N.A Minimum Instruction Time : 0**

**Correct Marks : 1**

Seven friends named P, Q, R, S, T, U and V are sitting around a circular table facing the centre but not necessarily in the same order. Q is not sitting adjacent to R. T is sitting third to the left of S. P is sitting third to the left of R. S is sitting third to the left of U. T is sitting second to the left of V. Who is sitting to the immediate left of Q?

**Options :**

1. ✓ S
2. ✘ V
3. ✘ P
4. ✘ T

**Question Number : 2 Question Id : 630680150392 Is Question Mandatory : No Calculator : None Response Time : N.A Think Time : N.A Minimum Instruction Time : 0**

**Correct Marks : 1**

Each of P, Q, R, S, T, U and V has an exam on a different day of the week starting on Monday and ending on Sunday of the same week. More than three persons have exams before V. T's exam is not on Monday. Only two persons take the exam between exams of R and V. U's exam is on Tuesday. R has an exam just before P's exam. The exam of S is just after V's exam. Only three persons have an exam between exams of Q and T. Who has an exam on Friday?

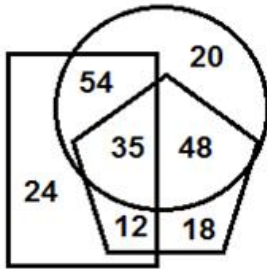
Options :

1. ✓ T
2. ✗ V
3. ✗ S
4. ✗ P

Question Number : 3 Question Id : 630680150393 Is Question Mandatory : No Calculator : None Response Time : N.A Think Time : N.A Minimum Instruction Time : 0

Correct Marks : 1

In the diagram given below, the rectangle represents clerks, the circle represents graduates and the pentagon represents part-time workers.



How many clerks are part-time workers?

Options :

1. ✗ 35
2. ✗ 12
3. ✗ 48
4. ✓ 47

Question Number : 4 Question Id : 630680150394 Is Question Mandatory : No Calculator : None Response Time : N.A Think Time : N.A Minimum Instruction Time : 0

Correct Marks : 1

Six friends Chetan, Kavya, Janit, Piyush, Rabi and Manya obtain different marks in an exam. Janit scores more marks than Rabi. Piyush scores lesser marks than Chetan. Manya scores more marks than Janit. Kavya scores lesser marks than Janit. Rabi scores lesser marks than Kavya. Rabi scores more marks than Piyush. Kavya scores more marks than Chetan. Who scores the highest marks?

Options :

1. ✗ Janit
2. ✗ Chetan
3. ✓ Manya
4. ✗ Kavya

Question Number : 5 Question Id : 630680150395 Is Question Mandatory : No Calculator : None Response Time : N.A Think Time : N.A Minimum Instruction Time : 0

Correct Marks : 1

Select the combination of letters that when sequentially placed in the blanks of the given series will complete the series.

M \_ T \_ M R N C \_ D M \_ O C T D \_ R P C \_ \_ M R

Options :

1. ✗ C D T R Q T D
2. ✓ C D T R M T D
3. ✗ R D T R M T D
4. ✗ C D C R N T D

**Question Number : 6 Question Id : 630680150396 Is Question Mandatory : No Calculator : None Response Time : N.A Think Time : N.A Minimum Instruction Time : 0**

**Correct Marks : 1**

In a certain code language, 'MANGOES' is coded as '81' and 'CARE' is coded as '31'. How will 'CLARITY' be written in that language?

**Options :**

1. ✖ 90
2. ✖ 92
3. ✔ 95
4. ✖ 99

**Question Number : 7 Question Id : 630680150397 Is Question Mandatory : No Calculator : None Response Time : N.A Think Time : N.A Minimum Instruction Time : 0**

**Correct Marks : 1**

Sujita walks 125 m towards the west direction from her home, and then she turns right and walks 240 m. After that, she turns right and walks 205 m. Then she turns right and walks 240 m. At what distance and in which direction is she now from her home?

**Options :**

1. ✖ 70 m, East
2. ✔ 80 m, East
3. ✖ 70 m, West
4. ✖ 80 m, West

**Question Number : 8 Question Id : 630680150398 Is Question Mandatory : No Calculator : None Response Time : N.A Think Time : N.A Minimum Instruction Time : 0**

**Correct Marks : 1**

Pointing to the photograph of Rohita, a lady said, 'she is my father's only brother's only son's wife'. How is Rohita's husband related to that lady's father?

**Options :**

1. ✖ Son's son
2. ✖ Father's brother
3. ✔ Brother's son
4. ✖ Brother

**Question Number : 9 Question Id : 630680150399 Is Question Mandatory : No Calculator : None Response Time : N.A Think Time : N.A Minimum Instruction Time : 0**

**Correct Marks : 1**

A & B means 'A is the husband of B'

A % B means 'A is the father of B'

A @ B means 'A is the sister of B'

A = B means 'A is the daughter of B'

If  $U \& M = L \% R @ H = F = K$ , then which of the following statements is NOT correct?

**Options :**

1. ✖ F is U's mother-in-law.
2. ✖ L is the husband of F.
3. ✔ R is U's sister.
4. ✖ H is the sister of M.

**Question Number : 10 Question Id : 630680150400 Is Question Mandatory : No Calculator : None Response Time : N.A Think Time : N.A Minimum Instruction Time : 0**

**Correct Marks : 1**

A question is given, followed by two statements labelled I and II. Identify which of the statements is/are sufficient/necessary to answer the question.

**Question:**

How is Kesar related to Geeta?

**Statements:**

- I. Geeta's mother Anita is married to Ansh. Kesar is the wife of Mohan.  
 II. Kesar is the mother of Jatin. Kesar is the daughter-in-law of Mayank.  
 III. Yogini is the mother of Mohan who is the brother of Ansh.

**Options :**

1. ✖ Both statements I and II are sufficient.
2. ✔ Both statements I and III are sufficient.
3. ✖ All three statements I, II and III together are not sufficient.
4. ✖ All three statements I, II and III together are necessary.

**Question Number : 11 Question Id : 630680150401 Is Question Mandatory : No Calculator : None Response Time : N.A Think Time : N.A Minimum Instruction Time : 0**

**Correct Marks : 1**

Select the option that is related to the third number in the same way as the second number is related to the first number.

Precarious : Dangerous :: Morose : ?

**Options :**

1. ✖ Mourn
2. ✖ Morbid
3. ✔ Sullen
4. ✖ Peculiar

**Question Number : 12 Question Id : 630680150402 Is Question Mandatory : No Calculator : None Response Time : N.A Think Time : N.A Minimum Instruction Time : 0**

**Correct Marks : 1**

Select the option that is true regarding the following two statements labelled Assertion (A) and Reason (R).

**Assertion (A):**The overuse or abuse of chemical fertilizers and pesticides can affect crop production and can cause water and soil pollution.

**Reason (R):** Increased use of chemical fertilisers accelerates the acidification of soil thus contaminating the groundwater and hampering the plant roots making them susceptible to various pathogens.

**Options :**

1. ✔ Both (A) and (R) are true and (R) is the correct explanation for (A).
2. ✖ Both (A) and (R) are true and (R) is not the correct explanation for (A).
3. ✖ (A) is true but (R) is false.
4. ✖ (A) is false but (R) is true.

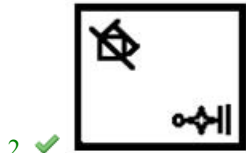
**Question Number : 13 Question Id : 630680150403 Is Question Mandatory : No Calculator : None Response Time : N.A Think Time : N.A Minimum Instruction Time : 0**

**Correct Marks : 1**

Select the figure from among the given options that can replace the question mark (?) in the following series.

**Options :**

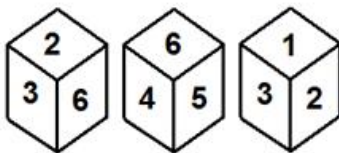
1. ✖



**Question Number : 14 Question Id : 630680150404 Is Question Mandatory : No Calculator : None Response Time : N.A Think Time : N.A Minimum Instruction Time : 0**

**Correct Marks : 1**

Three different positions of the same dice are shown, the six faces of which are numbered from 1 to 6. Select the number that will be on the face opposite to the one showing '1'.



**Options :**

- 1. ✗ 4
- 2. ✗ 5
- 3. ✓ 6
- 4. ✗ 3

**Question Number : 15 Question Id : 630680150405 Is Question Mandatory : No Calculator : None Response Time : N.A Think Time : N.A Minimum Instruction Time : 0**

**Correct Marks : 1**

Select the number from among the given options that can replace the question mark (?) in the following series.

27, 42, 58, 82, 133, ?

**Options :**

- 1. ✗ 244
- 2. ✓ 248
- 3. ✗ 252
- 4. ✗ 256

**Enable Mark as Answered Mark for Review and Clear Response :** Yes  
**Maximum Instruction Time :** 0  
**Is Section Default? :** null

**Question Number : 16 Question Id : 630680150406 Is Question Mandatory : No Calculator : None Response Time : N.A Think Time : N.A Minimum Instruction Time : 0**

**Correct Marks : 1**

A number  $1554x14$  is exactly divisible by 54. Find x.

Options :

1. ✖ 3
2. ✖ 5
3. ✔ 7
4. ✖ 9

Question Number : 17 Question Id : 630680150407 Is Question Mandatory : No Calculator : None Response Time : N.A Think Time : N.A Minimum Instruction Time : 0

Correct Marks : 1

The ratio in which a trader has to mix two varieties of wheat costing ₹32 per kg and ₹38 per kg, so as to make a mixture worth ₹36 per kg is:

Options :

1. ✔ 1 : 2
2. ✖ 2 : 3
3. ✖ 4 : 3
4. ✖ 3 : 1

Question Number : 18 Question Id : 630680150408 Is Question Mandatory : No Calculator : None Response Time : N.A Think Time : N.A Minimum Instruction Time : 0

Correct Marks : 1

The income of Rani is 15% more than the income of Vani. If Rani saves ₹12,450 and the expense of Rani is ₹7,450, then find the income of Vani (rounded to nearest integer).

Options :

1. ✖ ₹16,893
2. ✔ ₹17,304
3. ✖ ₹17,942
4. ✖ ₹18,565

Question Number : 19 Question Id : 630680150409 Is Question Mandatory : No Calculator : None Response Time : N.A Think Time : N.A Minimum Instruction Time : 0

Correct Marks : 1

Arjun sells a music system at a profit of  $\frac{1}{8}$  on its cost price to Bheem who in turn sells to Nakul at a loss of  $\frac{1}{10}$  of his cost price. Find the overall profit or loss percentage in the transaction.

Options :

1. ✖ Profit 3.5%

2. ✘ Loss 2.75%
3. ✘ Loss 1.5%
4. ✔ Profit 1.25%

**Question Number : 20 Question Id : 630680150410 Is Question Mandatory : No Calculator : None Response Time : N.A Think Time : N.A Minimum Instruction Time : 0**

**Correct Marks : 1**

A, B and C were partners in a firm having contributed ₹4,50,000, ₹5,50,000, and ₹6,00,000, respectively, at the beginning of the year. At the end of 3 months, B withdrew ₹50,000, and A contributed ₹50,000 more at the end of 6 months. If the firm earned a total profit of ₹1,63,830 at the end of the year, then A's share in the profit is:

**Options :**

1. ✘ ₹54,690
2. ✘ ₹54,345
3. ✘ ₹49,530
4. ✔ ₹49,020

**Question Number : 21 Question Id : 630680150411 Is Question Mandatory : No Calculator : None Response Time : N.A Think Time : N.A Minimum Instruction Time : 0**

**Correct Marks : 1**

If 36 men working 7 hours a day finish building a wall in 13 days, then how many days will it take for 14 men to build the same wall if they work for 12 hours a day?

**Options :**

1. ✘  $13\frac{1}{5}$
2. ✘  $15\frac{3}{8}$
3. ✔  $19\frac{1}{2}$
4. ✘  $21\frac{3}{4}$

**Question Number : 22 Question Id : 630680150412 Is Question Mandatory : No Calculator : None Response Time : N.A Think Time : N.A Minimum Instruction Time : 0**

**Correct Marks : 1**

Find the difference in compound interest for one year on a sum of ₹42,000 at 16% p.a. compounded quarterly and on a sum of ₹45,000 at 10% p.a. compounded half yearly.

**Options :**

1. ✔ Between ₹2,001 and ₹3,000

2. ✖ Between ₹3,001 and ₹4,000
3. ✖ Between ₹4,001 and ₹5,000
4. ✖ Between ₹5,001 and ₹6,000

**Question Number : 23 Question Id : 630680150413 Is Question Mandatory : No Calculator : None Response Time : N.A Think Time : N.A Minimum Instruction Time : 0**

**Correct Marks : 1**

Two trains, one from J to K and the other from K to J, start simultaneously. After they cross each other, the trains reach their destinations after 2 hours 15 minutes and 6 hours 15 minutes, respectively. If the speed of slower trains is 180 km/h, then what is the speed (in km/h) of the faster train?

**Options :**

1. ✖ 240
2. ✖ 270
3. ✔ 300
4. ✖ 340

**Question Number : 24 Question Id : 630680150414 Is Question Mandatory : No Calculator : None Response Time : N.A Think Time : N.A Minimum Instruction Time : 0**

**Correct Marks : 1**

Sultan and Multan can finish a work together in 25 days. Sultan and Kalyan can finish the same work together in 30 days. Multan is twice as efficient as Kalyan. In how many days can all three finish the work if they work together?

**Options :**

1. ✖  $22\frac{3}{8}$
2. ✔  $21\frac{3}{7}$
3. ✖  $20\frac{1}{6}$
4. ✖  $18\frac{5}{6}$

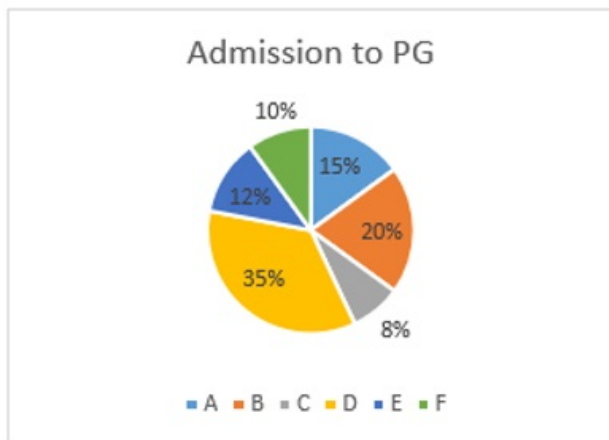
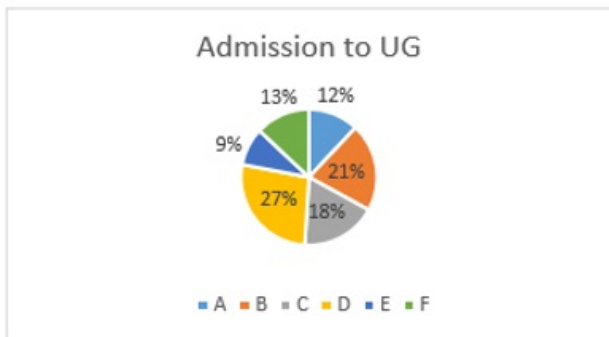
**Question Number : 25 Question Id : 630680150415 Is Question Mandatory : No Calculator : None Response Time : N.A Think Time : N.A Minimum Instruction Time : 0**

**Correct Marks : 1**



Study the given pie-charts and answer the question that follows.

The pie-charts give details of percentage of students enrolled for UG and PG courses in a university in the year 2018. The total admissions to UG and PG courses were 18,500 and 14,300, respectively.



Find the ratio of students enrolled in UG course B and D to students enrolled in PG course in C, E and F.

**Options :**


1. ✘ 245 : 126
2. ✔ 296 : 143
3. ✘ 342 : 197
4. ✘ 367 : 208

**Question Number : 26 Question Id : 630680150416 Is Question Mandatory : No Calculator : None Response Time : N.A Think Time : N.A Minimum Instruction Time : 0**

**Correct Marks : 1**

Study the given bar-chart and answer the question that follows.

The bar-chart shows the distribution of students who have appeared and passed an exam in the year 2018 conducted in five different states (L, M, N, O and P).



Find the percentage of students who passed from states M and P to students who appeared from states L and O (rounded off to one decimal place).

Options :

1. ✘ 60.5%
2. ✘ 62.3%
3. ✘ 65.7%
4. ✔ 68.6%

Question Number : 27 Question Id : 630680150417 Is Question Mandatory : No Calculator : None Response Time : N.A Think Time : N.A Minimum Instruction Time : 0

Correct Marks : 1

Find the value of a.

$$2a + 3b + 4c = 9$$

$$3a - b + 2c = 1$$

$$2b - a - 2c = 6$$

Options :

1. ✘ 1
2. ✔ 2
3. ✘ 3
4. ✘ 4

Question Number : 28 Question Id : 630680150418 Is Question Mandatory : No Calculator : None Response Time : N.A Think Time : N.A Minimum Instruction Time : 0

Correct Marks : 1

If the curved surface area of a cylinder is  $\frac{3}{5}$  of its total surface area, find the ratio of its radius to its height.

Options :

1. ✓ 2 : 3
2. ✗ 3 : 5
3. ✗ 9 : 5
4. ✗ 4 : 9

Question Number : 29 Question Id : 630680150419 Is Question Mandatory : No Calculator : None Response Time : N.A Think Time : N.A Minimum Instruction Time : 0

Correct Marks : 1

The base of a right prism is in the form of regular hexagon of side 6 cm. If its height is  $15\sqrt{3}$  cm, find the volume (in  $\text{cm}^3$ ) of the prism.

Options :

1. ✓ 2430
2. ✗ 2875
3. ✗ 3280
4. ✗ 3750

Question Number : 30 Question Id : 630680150420 Is Question Mandatory : No Calculator : None Response Time : N.A Think Time : N.A Minimum Instruction Time : 0

Correct Marks : 1

A square whose side is 4 cm has its corners cut so as to make an octagon with equal sides. Find the length (in cm) of the side of the octagon.

Options :

1. ✗  $\frac{2\sqrt{2}}{\sqrt{2} + 1}$
2. ✗  $\frac{\sqrt{2}}{2\sqrt{2} + 1}$
3. ✓  $\frac{4}{\sqrt{2} + 1}$
4. ✗  $\frac{2}{4\sqrt{2} + 1}$

Enable Mark as Answered Mark for Review and Clear Response : Yes  
 Maximum Instruction Time : 0  
 Is Section Default? : null

**Question Number : 31 Question Id : 630680150425 Is Question Mandatory : No Calculator : None Response Time : N.A Think Time : N.A Minimum Instruction Time : 0**

**Correct Marks : 1**

Select the correct meaning of the given idiom.

The die is cast

**Options :**

1. ✖ Future is left to chance
2. ✔ Course of action has been determined
3. ✖ The first step towards success
4. ✖ Hard work is rewarded

**Question Number : 32 Question Id : 630680150426 Is Question Mandatory : No Calculator : None Response Time : N.A Think Time : N.A Minimum Instruction Time : 0**

**Correct Marks : 1**

Select the most appropriate synonym of the given word.

Blatant

**Options :**

1. ✖ Secret
2. ✔ Glaring
3. ✖ Subtle
4. ✖ Greedy

**Question Number : 33 Question Id : 630680150427 Is Question Mandatory : No Calculator : None Response Time : N.A Think Time : N.A Minimum Instruction Time : 0**

**Correct Marks : 1**

Select the INCORRECTLY spelt word.

**Options :**

1. ✖ Perceive
2. ✔ Prowoke
3. ✖ Permission
4. ✖ Precise

**Question Number : 34 Question Id : 630680150428 Is Question Mandatory : No Calculator : None Response Time : N.A Think Time : N.A Minimum Instruction Time : 0**

**Correct Marks : 1**

Select the correctly spelt word.

**Options :**

1. ✖ Vengence
2. ✖ Vengance
3. ✖ Vangeance
4. ✔ Vengeance

**Question Number : 35 Question Id : 630680150429 Is Question Mandatory : No Calculator : None Response Time : N.A Think Time : N.A Minimum Instruction Time : 0**

**Correct Marks : 1**

Parts of a sentence are given below in jumbled order. Arrange the parts in the correct order to form a meaningful sentence.

- A. and their suggested involvement with conservation
- B. zoos were originally created
- C. didn't seriously arise until about 30 years ago
- D. as places of entertainment

**Options :**

1. ✖ BCAD

2. ✖ BADC
3. ✔ BDAC
4. ✖ BACD

**Question Number : 36 Question Id : 630680150430 Is Question Mandatory : No Calculator : None Response Time : N.A Think Time : N.A Minimum Instruction Time : 0**

**Correct Marks : 1**

Select the most appropriate ANTONYM of the given word.

Savage

**Options :**

1. ✖ Fertile
2. ✔ Civilised
3. ✖ Shallow
4. ✖ Familiar

**Question Number : 37 Question Id : 630680150431 Is Question Mandatory : No Calculator : None Response Time : N.A Think Time : N.A Minimum Instruction Time : 0**

**Correct Marks : 1**

Sentences of a paragraph are given below in jumbled order. Arrange the sentences in the correct order to form a meaningful and coherent paragraph.

- A. They indicate time by the length and direction of the sun's shadow.
- B. One of the first water clocks was a basin with a hole near the bottom through which the water dripped out.
- C. The sundial's counterpart, the water clock, was designed to measure temporal hours during the night.
- D. In order to track the temporal hours during the day, inventors created sundials.

**Options :**

1. ✔ DACB
2. ✖ DCBA
3. ✖ BADC
4. ✖ CABD

**Is Section Default? :**

null

**Question Id : 630680150421 Sub Question Shuffling Allowed : No Group Comprehension Questions : No Question Pattern Type : NonMatrix Calculator : None Response Time : N.A Think Time : N.A Minimum Instruction Time : 0**

**Question Numbers : (38 to 40)**

Read the given passage and answer the questions that follow.

The control of fire was the first and perhaps the greatest of humanity's steps towards a life-enhancing technology.

To early man, fire was a divine gift randomly delivered

in the form of lightning, forest fire or burning lava. Unable to make flame for themselves, the earliest peoples probably stored fire by keeping slow burning logs alight or by carrying charcoal in pots.

How and where man learnt how to produce flame at will is unknown. It was probably a secondary invention, accidentally made during tool-making operations with wood or stone. Studies of primitive societies suggest that the earliest method of making fire was through friction. European peasants would insert a wooden drill in a round hole and rotate it briskly between their palms This process could be speeded up by wrapping a cord around the drill and pulling on each end.

The Ancient Greeks used lenses or concave mirrors to concentrate the sun's rays and burning glasses were also used by Mexican Aztecs and the Chinese. In Arctic North America, the Eskimos produced a slow-burning spark by striking quartz against iron pyrites, a compound that contains sulphur. The Chinese lit their fires by striking porcelain with bamboo. In Europe, the combination of steel, flint and tinder remained the main method of fire-lighting until the mid-19th Century.

Fire-lighting was revolutionised by the discovery of phosphorus, isolated in 1669 by a German alchemist trying to transmute silver into gold. Impressed by the element's combustibility, several 17th Century chemists used it to manufacture fire-lighting devices, but the results were dangerously inflammable. With phosphorus costing the equivalent of several hundred pounds per ounce, the first matches were expensive.

**Sub questions**

**Question Number : 38 Question Id : 630680150422 Is Question Mandatory : No Calculator : None Response Time : N.A Think Time : N.A Minimum Instruction Time : 0**

**Correct Marks : 1**

The passage is mainly about:

**Options :**

1. ✖ how to control fire
2. ✔ how man learnt to make fire
3. ✖ the discovery of phosphorus
4. ✖ the invention of matches

**Question Number : 39 Question Id : 630680150423 Is Question Mandatory : No Calculator : None Response Time : N.A Think Time : N.A Minimum Instruction Time : 0**

**Correct Marks : 1**

In which country was the fire lit by striking porcelain with bamboo?

**Options :**

1. ✖ North America
2. ✖ Mexico
3. ✖ Greece
4. ✔ China

**Question Number : 40 Question Id : 630680150424 Is Question Mandatory : No Calculator : None Response Time : N.A Think Time : N.A Minimum Instruction Time : 0**

**Correct Marks : 1**

What quality of phosphorus made it the most suitable element for fire lighting?

**Options :**

1. ✖ Affordability
2. ✖ Safety
3. ✔ Combustibility
4. ✖ Availability

**Enable Mark as Answered Mark for Review and Clear Response :** Yes  
**Maximum Instruction Time :** 0  
**Is Section Default? :** null

**Question Number : 41 Question Id : 630680150432 Is Question Mandatory : No Calculator : None Response Time : N.A Think Time : N.A Minimum Instruction Time : 0**

**Correct Marks : 1**

In November 2022, researchers from which of the following institutes have developed a new artificial light-harvesting system that can efficiently capture light for power conversion by mimicking photosynthesis, the process by which plants absorb sunlight and produce sugars?

**Options :**

1. ✔ IISER-Thiruvananthapuram and IIT-Indore
2. ✖ CSIR-CLRI, Chennai and CSIR-NGRI, Hyderabad
3. ✖ IIT Chennai and IIT Hyderabad
4. ✖ CCRI- Alappuzha and JNCASR-Bengaluru

**Question Number : 42 Question Id : 630680150433 Is Question Mandatory : No Calculator : None Response Time : N.A Think Time : N.A Minimum Instruction Time : 0**

**Correct Marks : 1**

Pankaj Advani won his \_\_\_\_\_ world title after defeating Sourav Kothari in the 150-up billiards final at the World Championships in Kuala Lumpur in October 2022.

**Options :**

1. ✖ 20th
2. ✖ 21st
3. ✖ 23rd
4. ✔ 25th

**Question Number : 43 Question Id : 630680150434 Is Question Mandatory : No Calculator : None Response Time : N.A Think Time : N.A Minimum Instruction Time : 0**

**Correct Marks : 1**

What was the result of the Treaty of Sugauli between Nepal and British India?

**Options :**

1. ✖ Nepal was recognised as a fully sovereign state.
2. ✖ Districts of western terai were returned to Nepal.
3. ✔ The Gurkhas' service in the British army officially started.
4. ✖ No Customs duty should be levied at British Indian ports on goods imported on behalf of the Nepal Government.

**Question Number : 44 Question Id : 630680150435 Is Question Mandatory : No Calculator : None Response Time : N.A Think Time : N.A Minimum Instruction Time : 0**

**Correct Marks : 1**

Gagan Mahal was built around 1561 AD and served the two-fold purpose of a royal residence and durbar hall. It is located in \_\_\_\_\_.

**Options :**

1. ✖ Andhra Pradesh
2. ✖ Madhya Pradesh
3. ✔ Karnataka
4. ✖ Odisha

**Question Number : 45 Question Id : 630680150436 Is Question Mandatory : No Calculator : None Response Time : N.A Think Time : N.A Minimum Instruction Time : 0**

**Correct Marks : 1**

The veteran dancing duo from Agra, Nalini and Kamalini Asthana, who won Padma Awards 2022 in Art Category represent which dance form?

**Options :**

1. ✖ Manipuri
2. ✖ Kuchipudi
3. ✖ Bharatnatyam
4. ✔ Kathak

**Question Number : 46 Question Id : 630680150437 Is Question Mandatory : No Calculator : None Response Time : N.A Think Time : N.A Minimum Instruction Time : 0**

**Correct Marks : 1**

In which of the following states was Kudumbashree a Poverty Eradication Mission launched on 17 May 1998 and inaugurated by the then Prime Minister, Shri Atal Bihari Vajpayee?

**Options :**

1. ✔ Kerala
2. ✖ Karnataka
3. ✖ Tamil Nādu
4. ✖ Andhra Pradesh

**Question Number : 47 Question Id : 630680150438 Is Question Mandatory : No Calculator : None Response Time : N.A Think Time : N.A Minimum Instruction Time : 0**

**Correct Marks : 1**

In June 2022, scientists recorded four species of azooxanthellate corals for the first time from Indian waters in which of the following areas?

**Options :**

1. ✖ Malvan Beach
2. ✖ Lakshadweep Islands
3. ✔ Andaman and Nicobar Islands
4. ✖ Gulf of Kutch

**Question Number : 48 Question Id : 630680150439 Is Question Mandatory : No Calculator : None Response Time : N.A Think Time : N.A Minimum Instruction Time : 0**

**Correct Marks : 1**

Which of the following states falls in the category of 'Achievers', according to LEADS report 2022?

**Options :**

1. ✖ Madhya Pradesh
2. ✖ Rajasthan
3. ✖ Kerala
4. ✔ Uttarakhand

**Question Number : 49 Question Id : 630680150440 Is Question Mandatory : No Calculator : None Response Time : N.A Think Time : N.A Minimum Instruction Time : 0**

**Correct Marks : 1**

Which of the following committees in 1928 recommended that the Constitution should declare fundamental rights?

**Options :**

1. ✔ Nehru Committee
2. ✖ Ambedkar Committee
3. ✖ VKRV Rao Committee
4. ✖ Kelkar Committee

**Question Number : 50 Question Id : 630680150441 Is Question Mandatory : No Calculator : None Response Time : N.A Think Time : N.A Minimum Instruction Time : 0**

**Correct Marks : 1**

What is question hour in Lok Sabha?

**Options :**

1. ✔ The first hour of a sitting of the Lok Sabha devoted to questions.
2. ✖ the first hour of a sitting of the Lok Sabha after zero hour devoted to questions.
3. ✖ The first hour of a sitting of the Lok Sabha after the lunch break devoted to questions.
4. ✖ The first hour of a sitting of the Lok Sabha devoted to questions after half an hour discussion.

**Enable Mark as Answered Mark for Review and Clear Response :** Yes

**Maximum Instruction Time :** 0

**Is Section Default? :** null

**Question Number : 51 Question Id : 630680150442 Is Question Mandatory : No Calculator : None Response Time : N.A Think Time : N.A Minimum Instruction Time : 0**

**Correct Marks : 1**

As per which section of CCS (Conduct) Rules, 1964, a government servant publishing a book or participating in public media shall at all times make it clear that the views expressed by him are his or her own and not that of the government?

**Options :**

1. ✖ Rule 6
2. ✖ Rule 7
3. ✔ Rule 8
4. ✖ Rule 9

**Question Number : 52 Question Id : 630680150443 Is Question Mandatory : No Calculator : None Response Time : N.A Think Time : N.A Minimum Instruction Time : 0**

**Correct Marks : 1**

Under which rule of CCS (Leave) Rules, 1972 is it stated that leave cannot be claimed as a matter of right?

**Options :**

1. ✖ Rule 5
2. ✖ Rule 6
3. ✔ Rule 7
4. ✖ Rule 8



**Question Number : 53 Question Id : 630680150444 Is Question Mandatory : No Calculator : None Response Time : N.A Think Time : N.A Minimum Instruction Time : 0**

**Correct Marks : 1**

Leave not due in respect of a government servant shall be debited against which of the following?

**Options :**

1. ✖ Debited against Earned Leave to be earned subsequently
2. ✔ Debited against Half Pay Leave to be earned subsequently
3. ✖ Debited against Medical Leave to be earned subsequently
4. ✖ Debited against CCL to be earned subsequently

**Question Number : 54 Question Id : 630680150445 Is Question Mandatory : No Calculator : None Response Time : N.A Think Time : N.A Minimum Instruction Time : 0**

**Correct Marks : 1**

Under which Rule may a government servant prefer an appeal against the penalty imposed upon him?

**Options :**

1. ✖ Rule 14
2. ✖ Rule 16
3. ✔ Rule 23
4. ✖ Rule 24

**Question Number : 55 Question Id : 630680150446 Is Question Mandatory : No Calculator : None Response Time : N.A Think Time : N.A Minimum Instruction Time : 0**

**Correct Marks : 1**

'Appellate Authority' is mentioned in which rule of CCS (CCA) Rules, 1965?

**Options :**

1. ✖ Rule 16
2. ✖ Rule 18
3. ✖ Rule 23
4. ✔ Rule 24

**Question Number : 56 Question Id : 630680150447 Is Question Mandatory : No Calculator : None Response Time : N.A Think Time : N.A Minimum Instruction Time : 0**

**Correct Marks : 1**

Identify the kind of pension that a government servant gets in case of mental or bodily infirmity as a result of which permanent incapacitation occurs.

**Options :**

1. ✖ Notional Pension
2. ✖ Premature Pension
3. ✖ Family Pension
4. ✔ Invalid Pension

**Question Number : 57 Question Id : 630680150448 Is Question Mandatory : No Calculator : None Response Time : N.A Think Time : N.A Minimum Instruction Time : 0**

**Correct Marks : 1**

Which of the following is NOT true regarding provision of exemption from disclosure of information under the RTI Act, 2005?

**Options :**

1. ✖ If the disclosure of information may cause a breach of privilege of Parliament or the State Legislature
2. ✖ If the information is received in confidence from foreign Government
3. ✔ If the Information pertains to salary and wages of a Government servant
4. ✖ If the information pertains to Cabinet papers including record of deliberations of Council of Ministers etc.

**Question Number : 58 Question Id : 630680150449 Is Question Mandatory : No Calculator : None Response Time : N.A Think Time : N.A Minimum Instruction Time : 0**

**Correct Marks : 1**

Which of the following options is INCORRECT with respect to 'public authority', under the RTI Act?

**Options :**

1. ✖ Established by or under the Constitution
2. ✖ Established by any other law made by Parliament/State Legislature
3. ✔ Constituted by an order issued by the High Court
4. ✖ Established by a body owned, controlled or substantially financed

**Question Number : 59 Question Id : 630680150450 Is Question Mandatory : No Calculator : None Response Time : N.A Think Time : N.A Minimum Instruction Time : 0**

**Correct Marks : 1**

A government servant has to submit the claim for reimbursement of expenditure against the LTC advance on completion of return journey within a period of how many days?

**Options :**

1. ✔ One month
2. ✖ Two months
3. ✖ Three months
4. ✖ Forty-five days

**Question Number : 60 Question Id : 630680150451 Is Question Mandatory : No Calculator : None Response Time : N.A Think Time : N.A Minimum Instruction Time : 0**

**Correct Marks : 1**

Which section of the Sexual Harassment of Women at Workplace (PPR) Act, 2013 provides a system of Constitution of Internal Complaints Committee in an organisation?

**Options :**

1. ✔ Section 4
2. ✖ Section 6
3. ✖ Section 9
4. ✖ Section 12

**Question Number : 61 Question Id : 630680150452 Is Question Mandatory : No Calculator : None Response Time : N.A Think Time : N.A Minimum Instruction Time : 0**

**Correct Marks : 1**

Which of the following is NOT correct as per the definitions of the circumstances, if it occurs or is present in relation to or connected with any act or behaviour of sexual harassment amounting to sexual harassment as per the Sexual Harassment of Women at Workplace (PPR) Act, 2013?

**Options :**

1. ✖ Implied or explicit promise of preferential treatment in employment
2. ✖ Implied or explicit threat of detrimental treatment in employment CS (Medical Attendance) Rules
3. ✖ Humiliating treatment likely to affect her health or safety
4. ✔ Implied or explicit threat relating to her family members

**Question Number : 62 Question Id : 630680150453 Is Question Mandatory : No Calculator : None Response Time : N.A Think Time : N.A Minimum Instruction Time : 0**

**Correct Marks : 1**

Which rule of the CS (Medical Attendance) Rules, 1944 provides treatment outside India i.e., a government servant shall be eligible to obtain medical treatment outside India or, as the case may be, to claim reimbursement of the cost of medical treatment obtained inside or outside India in accordance with the provisions of this rule?

**Options :**

1. ✖ Rule 9
2. ✔ Rule 11
3. ✖ Rule 14
4. ✖ Rule 18

**Question Number : 63 Question Id : 630680150454 Is Question Mandatory : No Calculator : None Response Time : N.A Think Time : N.A Minimum Instruction Time : 0**

**Correct Marks : 1**

Travelling Allowance For Medical Attendance Journeys, as per CS (Medical Attendance) Rules, 1944, is admissible when the place at which a patient falls ill is more than \_\_\_\_\_ miles by the shortest route from the consulting room of the authorised medical attendant.

**Options :**

1. ✖ 3
2. ✔ 5
3. ✖ 7
4. ✖ 10

**Question Number : 64 Question Id : 630680150455 Is Question Mandatory : No Calculator : None Response Time : N.A Think Time : N.A Minimum Instruction Time : 0**

**Correct Marks : 1**

Which one of the following Acts refers very close to Fundamental Rules?

**Options :**

1. ✖ The Representation of the People Act, 1951
2. ✖ Regulating Act of 1773
3. ✖ The Charter Act of 1853
4. ✔ Government of India Act, 1935

**Question Number : 65 Question Id : 630680150456 Is Question Mandatory : No Calculator : None Response Time : N.A Think Time : N.A Minimum Instruction Time : 0**

**Correct Marks : 1**

Which of the following is the right kind of challan used for making payment of Corporation Tax and Income Tax on Other than Companies?

**Options :**

1. ✖ ITNS 281
2. ✖ ITNS 282
3. ✖ ITNS 283
4. ✔ ITNS 284

**Question Number : 66 Question Id : 630680150457 Is Question Mandatory : No Calculator : None Response Time : N.A Think Time : N.A Minimum Instruction Time : 0**

**Correct Marks : 1**

In simple words, Income Tax may be defined as a/an:

**Options :**

1. ✖ professional tax
2. ✔ direct tax
3. ✖ service tax
4. ✖ indirect tax

**Question Number : 67 Question Id : 630680150458 Is Question Mandatory : No Calculator : None Response Time : N.A Think Time : N.A Minimum Instruction Time : 0**

**Correct Marks : 1**

Rule 296 of General Financial Rules (GFR) – 2017 deals with which of the following?

**Options :**

1. ✖ Loss of assets due to natural calamities
2. ✖ Condonation of loss of books and articles
3. ✔ Time barred claims of government servants
4. ✖ Development charges

**Question Number : 68 Question Id : 630680150459 Is Question Mandatory : No Calculator : None Response Time : N.A Think Time : N.A Minimum Instruction Time : 0**

**Correct Marks : 1**

Under General Financial Rules (GFR) – 2017, the term ‘goods’, used in the Manual for Procurement of Goods 2017 does NOT include:

**Options :**

1. ✖ furniture
2. ✖ stationery items
3. ✔ books and journals for a library
4. ✖ livestock

**Question Number : 69 Question Id : 630680150460 Is Question Mandatory : No Calculator : None Response Time : N.A Think Time : N.A Minimum Instruction Time : 0**

**Correct Marks : 1**

As per General Financial Rules (GFR) – 2017, by way of appropriation or re-appropriation, a particular amount of money is earmarked to meet the expenditure on a particular job as mentioned in which of the following?

**Options :**

1. ✖ Monthly Accounts
2. ✖ Annual Accounts
3. ✖ Contingency Bill
4. ✔ Detailed Demand of Grants

**Question Number : 70 Question Id : 630680150461 Is Question Mandatory : No Calculator : None Response Time : N.A Think Time : N.A Minimum Instruction Time : 0**

**Correct Marks : 1**

Will 'the procurement of goods and services by the Government be mandatory for goods and services available on GeM'?

**Options :**

1. ✖ No, it is not mandatory
2. ✖ It is so for items valued ₹10,000 and above
3. ✖ It is mandatory only for goods and not services
4. ✔ Yes, it is mandatory

**Question Number : 71 Question Id : 630680150462 Is Question Mandatory : No Calculator : None Response Time : N.A Think Time : N.A Minimum Instruction Time : 0**

**Correct Marks : 1**

Which rule of Central Civil Services (Conduct) Rules, 1964 prohibits the criticism of the government by a government servant? If a government servant indulges in criticism of the government and its policies, appropriate action (including disciplinary action) shall be taken under this rule.

**Options :**

1. ✖ Rule 11
2. ✔ Rule 9
3. ✖ Rule 21
4. ✖ Rule 3

**Question Number : 72 Question Id : 630680150463 Is Question Mandatory : No Calculator : None Response Time : N.A Think Time : N.A Minimum Instruction Time : 0**

**Correct Marks : 1**

Every government servant shall, on his first appointment to any service or post, submit a return of his assets and liabilities. This is a part of which of the following rules of the CCS (Conduct) Rules, 1964?

**Options :**

1. ✖ Rule 17
2. ✔ Rule 18
3. ✖ Rule 19
4. ✖ Rule 20

**Question Number : 73 Question Id : 630680150464 Is Question Mandatory : No Calculator : None Response Time : N.A Think Time : N.A Minimum Instruction Time : 0**

**Correct Marks : 1**

In August 2016, the Ministry of Commerce and Industry, Government of India launched GeM, a centralised system for the purchase of goods by government buyers. What is the full form of GeM?

**Options :**

1. ✖ Government e-Marketing
2. ✔ Government e-Marketplace
3. ✖ Government e-Money
4. ✖ Goods e-Marketing

**Question Number : 74 Question Id : 630680150465 Is Question Mandatory : No Calculator : None Response Time : N.A Think Time : N.A Minimum Instruction Time : 0**

**Correct Marks : 1**

A duly constituted Local Purchase Committee is empowered to make a purchase above \_\_\_\_\_ and upto \_\_\_\_\_.

**Options :**

1. ✖ ₹10,000, ₹25,000
2. ✖ ₹15000 to ₹1,00000
3. ✖ ₹25,000, ₹1,50,000
4. ✔ ₹25,001, ₹2,50,000

**Question Number : 75 Question Id : 630680150466 Is Question Mandatory : No Calculator : None Response Time : N.A Think Time : N.A Minimum Instruction Time : 0**

**Correct Marks : 1**

Which of the following is NOT an attached office under the Government of India?

**Options :**

1. ✖ Central Electricity Authority (CEA)
2. ✖ National Archives of India (ASI)
3. ✔ NITI Aayog (NITI)
4. ✖ Development Commissioner(Handicrafts) (DCH)

**Question Number : 76 Question Id : 630680150467 Is Question Mandatory : No Calculator : None Response Time : N.A Think Time : N.A Minimum Instruction Time : 0**

**Correct Marks : 1**

In case of decisions bearing financial implications that are beyond the powers delegated to a department, inter-ministerial consultations are conducted. Which of the following is NOT a method of such consultation?

**Options :**

1. ✖ Standing Finance Committee (SFC)
2. ✖ Public Private Partnership Approval Committee (PPPAC)
3. ✖ Public Investment Board (PIB)
4. ✔ Standing Committee on Finance (SCF)

**Question Number : 77 Question Id : 630680150468 Is Question Mandatory : No Calculator : None Response Time : N.A Think Time : N.A Minimum Instruction Time : 0**

**Correct Marks : 1**

As per the Manual of Office Procedure, on receiving the fresh receipts (Letters etc) which of the following is NOT the responsibility of the Section Officer?

**Options :**

1. ✖ To go through the receipt and forward mis-sent receipts or emails directly to the section concerned
2. ✖ To separate those under the departmental instructions
3. ✖ To indicate urgency grading, deadline and/or give directions regarding line of action
4. ✔ To send a reply immediately to urgent communications

**Question Number : 78 Question Id : 630680150469 Is Question Mandatory : No Calculator : None Response Time : N.A Think Time : N.A Minimum Instruction Time : 0**

**Correct Marks : 1**

The ministries/departments have been delegated powers to make their own arrangements for procurement of goods under:

**Options :**

1. ✓ General Financial Rules, 2017
2. ✘ schedule of Administrative Powers
3. ✘ manual on policies and procedures for purchase of goods and services
4. ✘ Delegation of Financial Power Rules, 1978

**Question Number : 79 Question Id : 630680150470 Is Question Mandatory : No Calculator : None Response Time : N.A Think Time : N.A Minimum Instruction Time : 0**

**Correct Marks : 1**

Functional file number was developed by DARPG with respect to functions common to all ministries and departments and common office function codes have been prepared. Which of the following is an INCORRECT code?

**Options :**

1. ✘ A : Establishment
2. ✘ B : Welfare
3. ✓ E : Parliament
4. ✘ F : Public relations

**Question Number : 80 Question Id : 630680150471 Is Question Mandatory : No Calculator : None Response Time : N.A Think Time : N.A Minimum Instruction Time : 0**

**Correct Marks : 1**

In offices, which division maintains Stores ledger as a standard practice?

**Options :**

1. ✘ Store department
2. ✘ Sales department
3. ✘ Admin department
4. ✓ Cost accounting department

**Question Number : 81 Question Id : 630680150472 Is Question Mandatory : No Calculator : None Response Time : N.A Think Time : N.A Minimum Instruction Time : 0**

**Correct Marks : 1**

Which of the following is an INCORRECT nomenclature for various sessions of the Parliament sittings?

**Options :**

1. ✓ Summer Session
2. ✘ Winter Session
3. ✘ Monsoon Session
4. ✘ Budget Session

**Question Number : 82 Question Id : 630680150473 Is Question Mandatory : No Calculator : None Response Time : N.A Think Time : N.A Minimum Instruction Time : 0**

**Correct Marks : 1**

The zero hour in Parliament is not mentioned in the Rules of Procedure. Thus, it is an informal device available to the members of the Parliament to raise matters without any prior notice. It is an Indian innovation in the field of parliamentary procedures and has been in existence since which year?

**Options :**

1. ✓ 1962
2. ✘ 1975
3. ✘ 1976
4. ✘ 1978

**Question Number : 83 Question Id : 630680150474 Is Question Mandatory : No Calculator : None Response Time : N.A Think Time : N.A Minimum Instruction Time : 0**

**Correct Marks : 1**

Which of the following is NOT a correct nomenclature for various types of Parliament Questions?

**Options :**

1. ✓ Zero Hour Question
2. ✖ Short Notice Questions
3. ✖ Unstarred Question
4. ✖ Starred Question

**Question Number : 84 Question Id : 630680150475 Is Question Mandatory : No Calculator : None Response Time : N.A Think Time : N.A Minimum Instruction Time : 0**

**Correct Marks : 1**

Which of the following is NOT an autonomous body of the Government of India?

**Options :**

1. ✖ National School of Drama
2. ✓ National Archives of India
3. ✖ Sahitya Natak Akademi
4. ✖ Lalit Kala Academy

**Question Number : 85 Question Id : 630680150476 Is Question Mandatory : No Calculator : None Response Time : N.A Think Time : N.A Minimum Instruction Time : 0**

**Correct Marks : 1**

Which of the following is NOT a correct urgency grading of a file, as per the Manual of Office Procedure?

**Options :**

1. ✖ Top Priority
2. ✖ Immediate
3. ✓ Urgent
4. ✖ Priority

**Question Number : 86 Question Id : 630680150477 Is Question Mandatory : No Calculator : None Response Time : N.A Think Time : N.A Minimum Instruction Time : 0**

**Correct Marks : 1**

For a government servant, what is the maximum permissible limit of days to encash leave under availing LTC facilities?

**Options :**

1. ✖ 30 days
2. ✖ 45 days
3. ✓ 60 days
4. ✖ 90 days

**Question Number : 87 Question Id : 630680150478 Is Question Mandatory : No Calculator : None Response Time : N.A Think Time : N.A Minimum Instruction Time : 0**

**Correct Marks : 1**

Chief Information Commissioner or an Information Commissioner may, at any time, by writing under his hand addressed to \_\_\_\_\_, resign from his office.

**Options :**

1. ✖ the Prime Minister
2. ✖ the Speaker of Lok Sabha
3. ✓ the President
4. ✖ the Chief Justice of Supreme Court

**Question Number : 88 Question Id : 630680150479 Is Question Mandatory : No Calculator : None Response Time : N.A Think Time : N.A Minimum Instruction Time : 0**

**Correct Marks : 1**

‘Noting’ is the process of recording a note on the notes portion of a file. A note is recorded by the ‘dealing officer’ and ‘other officers’ in the hierarchy to facilitate decision making by the ‘competent authority’.’ Which of the following statements is NOT true about noting?

**Options :**

1. ✖ It should be written either in black or blue ink by the staff.
2. ✖ It is submitted either to seek approval of the competent authority or for information.

3. ✓ It should cover all minor details and reproduction from the Fresh Receipt.
4. ✘ All notes shall be recorded on the note sheet (Green Sheet).

**Question Number : 89 Question Id : 630680150480 Is Question Mandatory : No Calculator : None Response Time : N.A Think Time : N.A Minimum Instruction Time : 0**

**Correct Marks : 1**

Earned leave is credited to the leave account of a government servant at the rate of how many days for each completed calendar month of service?

**Options :**

1. ✘ 1½ days
2. ✓ 2½ days
3. ✘ 3 days
4. ✘ 5½ days

**Question Number : 90 Question Id : 630680150481 Is Question Mandatory : No Calculator : None Response Time : N.A Think Time : N.A Minimum Instruction Time : 0**

**Correct Marks : 1**

Which rule of CCS (CCA) Rules, 1965 prescribes 'Common Proceedings'?

**Options :**

1. ✓ Rule 18
2. ✘ Rule 19
3. ✘ Rule 21
4. ✘ Rule 23

**Enable Mark as Answered Mark for Review and Clear Response :** Yes

**Maximum Instruction Time :** 0

**Is Section Default? :** null

**Question Number : 91 Question Id : 630680150482 Is Question Mandatory : No Calculator : None Response Time : N.A Think Time : N.A Minimum Instruction Time : 0**

**Correct Marks : 1**

Which of the following is true related to payroll accounting?

**Options :**

1. ✓ Payroll accounting is country-specific.
2. ✘ Payroll accounting does not need time evaluation.
3. ✘ Only one payroll area can be run at the time.
4. ✘ Payroll accounting is not country-specific.

**Question Number : 92 Question Id : 630680150483 Is Question Mandatory : No Calculator : None Response Time : N.A Think Time : N.A Minimum Instruction Time : 0**

**Correct Marks : 1**

Payroll T-codes are easy to memorise; they normally start with PC00 followed by which numbers?

**Options :**

1. ✓ Country-grouping numbers
2. ✘ City-grouping numbers
3. ✘ Local-grouping numbers
4. ✘ Domestic-grouping numbers

**Question Number : 93 Question Id : 630680150484 Is Question Mandatory : No Calculator : None Response Time : N.A Think Time : N.A Minimum Instruction Time : 0**

**Correct Marks : 1**

The length of G/L account number should be mentioned in:

**Options :**



1. ✖ G/L account ledger
2. ✖ G/L account
3. ✔ chart of accounts
4. ✖ G/L account groups

**Question Number : 94 Question Id : 630680150485 Is Question Mandatory : No Calculator : None Response Time : N.A Think Time : N.A Minimum Instruction Time : 0**

**Correct Marks : 1**

Which of the following is NOT a combination as chart of accounts (COA) in company code?

**Options :**

1. ✖ One operating and one alternate chart of accounts
2. ✔ One operating and many group chart of accounts
3. ✖ One operating, one group and one alternate chart of accounts
4. ✖ One operating and one group chart of accounts

**Question Number : 95 Question Id : 630680150486 Is Question Mandatory : No Calculator : None Response Time : N.A Think Time : N.A Minimum Instruction Time : 0**

**Correct Marks : 1**

Which of the following is NOT a component under Finance Accounting?

**Options :**

1. ✖ General Ledger
2. ✖ Fixed Assets
3. ✖ AR/AP
4. ✔ Cost Centre

**Question Number : 96 Question Id : 630680150487 Is Question Mandatory : No Calculator : None Response Time : N.A Think Time : N.A Minimum Instruction Time : 0**

**Correct Marks : 1**

For what purpose is Closing Cockpit used?

**Options :**

1. ✔ To perform periodically recurring activities.
2. ✖ To run reconciliation between CO and FI.
3. ✖ To perform day-to-day activities.
4. ✖ To create mass change of offsetting days for existing activities.

**Question Number : 97 Question Id : 630680150488 Is Question Mandatory : No Calculator : None Response Time : N.A Think Time : N.A Minimum Instruction Time : 0**

**Correct Marks : 1**

Which of the following transaction codes is NOT used for purchasing tables?

**Options :**

1. ✖ EKPO
2. ✔ EKBK
3. ✖ EBKN
4. ✖ EKBE

**Question Number : 98 Question Id : 630680150489 Is Question Mandatory : No Calculator : None Response Time : N.A Think Time : N.A Minimum Instruction Time : 0**

**Correct Marks : 1**

Which pre-requisite are mandatory for creating a purchase info record?

**Options :**

1. ✖ Material Number
2. ✖ MPN
3. ✖ Vendor Number

4. ✓ Material Number, Vendor Number and MPN

**Question Number : 99 Question Id : 630680150490 Is Question Mandatory : No Calculator : None Response Time : N.A Think Time : N.A Minimum Instruction Time : 0**

**Correct Marks : 1**

Which of the following is NOT a purchase order type?

**Options :**

1. ✘ Material
2. ✘ Service
3. ✓ Inventory
4. ✘ Limit type

**Question Number : 100 Question Id : 630680150491 Is Question Mandatory : No Calculator : None Response Time : N.A Think Time : N.A Minimum Instruction Time : 0**

**Correct Marks : 1**

What is a planned purchase order?

**Options :**

1. ✓ A planned purchased order is a long-term agreement committing to buy items or services from a single source.
2. ✘ A planned purchased order is short-term agreement committing to buy items or services from a single source.
3. ✘ A planned purchased order is a long-term agreement committing to sell items or services from multiple sources.
4. ✘ A planned purchased order is a long-term agreement committing to sell items or services from a single source.